





Three squares can be joined corner to corner


like this:



or like this:



and boxed in:



area = 9 squares



area = 6 squares

Join 4 squares corner to corner and find the areas of rectangles that can be made.

Investigate for different numbers of squares.